

26.02.21

Thursday, February 11, 2021 12:51 PM

Well done for another great week of learning year 5!

26.02.21

TBQ: Can I use a range of techniques to solve a range of mathematical questions?

### Counting

Count backwards from 108 in 9's.


What would the 8<sup>th</sup> number in the sequence be?

### Activity 1

#### A bit fishy

A goldfish costs £1.80.

An angel fish costs £1.40.



Nasreen paid exactly £20 for some fish.

How many of each kind did she buy?

## Activity 2

### Anyone for tennis?

Two boys and two girls can play tennis.



Ali said: 'I will only play if Holly plays.'

Holly said: 'I won't play if Ben is playing.'

Ben said: 'I won't play if Luke or Laura plays.'


Luke said: 'I will only play if Zoe plays.'

Zoe said: 'I don't mind who I play with.'

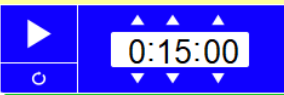
Which two boys and which two girls play tennis?

## Today's Task

You are going to have the following times to complete the following activities. Remember to show your working if needed - Accelerated Maths is not a mental maths test!



Accelerated Maths - complete both your class and your shape groups



Times Tables Rockstars

A battle has been set up across year 5 so that you can please against your friends! It is on 'battle of the bands' on TTRS! It runs from 9.15am to 11am today!